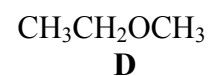
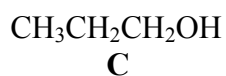
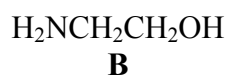
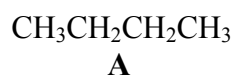


Homework/Problem Set #2
Chapter 2

1. The attractive force in alkanes can be explained by the following type of interaction.

(a) hydrogen bonding (b) dispersion forces (c) permanent dipole (d) ionic forces.

2. Arrange the following compounds in order from highest to lowest boiling point.



3. Circle and identify each functional group in the following compounds.

